



Name: _____ Class & Sec: _____ Date: 21.05.2024 Roll No: _____



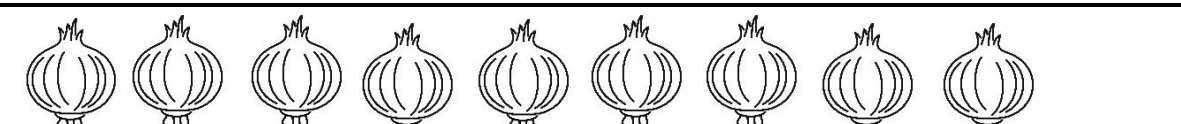

Time: 45 minutes
Max. Marks- 5

Marks obtained:
Teacher's Sign:

➤ **Activity- "Count Me"**

❖ **Look at the picture chart of the vegetables and answer the following questions:**

Picture Chart

Carrots	
Potatoes	
Onions	
Brinjals	

Q1. Count and write how many of each kind:

--	--	--	--

Q2. Which vegetable is the most in number among these? Ans: _____

Q3. Which vegetable is the least in number among these? Ans: _____

Q4. Colour the vegetables in the picture chart according to the colour code given below:

